



KMMC
KARATE MASTERS MATHEMATICS
COMPETITIONS

Karate Masters Mathematics Competitions

2nd Annual

KMMC 8 B

Thursday, December 30, 2021



INSTRUCTIONS

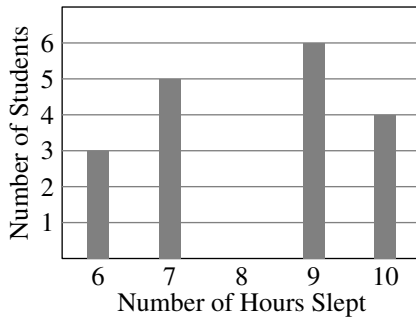
1. DO NOT OPEN THIS BOOKLET UNTIL YOU DECIDE TO BEGIN.
2. This is a twenty-five question multiple choice test. For each question, only one answer choice is correct.
3. Mark your answer to each problem on the KMMC 8 Answer Form with a keyboard. Check the keys for accuracy and erase errors and stray marks completely.
4. SCORING: You will receive 1 point for each correct answer, 0 points for each problem left unanswered, and 0 points for each incorrect answer.
5. Only blank scratch paper, rulers, and erasers are allowed as aids. Prohibited materials include calculators, smartwatches, phones, computing devices, compasses, protractors, and graph paper. No problems on the competition will require the use of a calculator.
6. Figures are not necessarily drawn to scale.
7. Before beginning the competition, your competition manager will not ask you to record your name and other information on the answer sheet.
8. You will have 40 minutes to complete the competition once you start the test.
9. When you finish the competition, don't sign your name in the space provided on the answer sheet.

The KMMC Committee reserves the right to disqualify scores from a school if it determines that the rules or the required security procedures were not followed.

The publication, reproduction or communication of the problems or solutions of this competition during the period when students are eligible to participate seriously jeopardizes the integrity of the results. Dissemination via phone, email, or digital media of any type during this period is a violation of the competition rules.

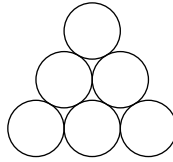
1. Karate spent \$1.75 on candy, \$2.15 on soda, and \$4.25 on popcorn. If Karate pays with only 1-dollar bills, what is the least possible amount of change he could get back?
- (A) \$0.15 (B) \$0.40 (C) \$0.55 (D) \$0.60 (E) \$0.85
2. What is the value of the expression $\frac{4 \cdot 5 \cdot 6}{2(0 + 2 + 1)}$?
- (A) 20 (B) 28 (C) 30 (D) 36 (E) 40
3. Naruto is running forwards. At some point, he turns around and runs backwards. If Naruto ran a total of 60 equal steps and ended up 24 steps behind where he started running, for how many steps was Naruto running backwards?
- (A) 18 (B) 36 (C) 38 (D) 40 (E) 42
4. Aki and Ayaka take a total of eight pictures in which at least one of them appears. If Aki appears in five of the pictures, and Ayaka appears in seven of the pictures, in how many of the pictures do they both appear?
- (A) 0 (B) 1 (C) 2 (D) 3 (E) 4
5. Karate and Judo are playing a game with 100 rounds. Each round, either Karate wins, Judo wins, or they tie. If Karate wins 3 rounds, and the number of rounds Judo wins is a perfect square, what is the least possible number of rounds where they tie?
- (A) 16 (B) 19 (C) 22 (D) 25 (E) 28
6. Haruka's Ice Cream Shop sells ice cream cones where each wafer cone and each scoop of ice cream costs the same amount for all of the orders. If an ice cream cone with four scoops costs the same as three ice cream cones with one scoop each, what is the ratio between the cost of a wafer cone and the cost of a scoop of ice cream?
- (A) 1 : 3 (B) 1 : 2 (C) 2 : 3 (D) 1 : 1 (E) 2 : 1
7. Which of the following numbers cannot be expressed as the sum of two prime numbers?
- (A) 15 (B) 16 (C) 17 (D) 18 (E) 19

8. A line intersects a rectangle and divides it into two shapes. If one of the shapes has 4 sides, what are all of the numbers of sides the other shape could possibly have?
- (A) 3 (B) 4 (C) 3 and 4 (D) 4 and 5 (E) 3, 4, and 5
9. How many 5-digit numbers evenly divide 100,000?
- (A) 2 (B) 3 (C) 4 (D) 5 (E) 6
10. In a survey, Karate asked the students of his third grade class how many hours of sleep each student got last night. The bar graph below shows the results of Karate's survey. However, the bar representing 8 hours has been mysteriously erased. If the median number of hours slept is 8.5, how many students slept for 8 hours?

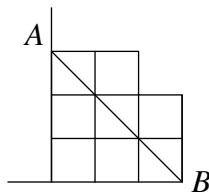


- (A) 1 (B) 2 (C) 3 (D) 4 (E) 5
11. Judo has 100 bronze coins. As many times as he wants, he can exchange 4 bronze coins for a silver coin or 6 silver coins for a gold coin. What is the smallest number of coins that Judo can have after making some number of exchanges?
- (A) 5 (B) 7 (C) 8 (D) 10 (E) 12
12. What is the probability that a randomly chosen arrangement of the letters of the word *KARATE* will have an *A* as the first letter or the last letter (or both)?
- (A) $\frac{7}{15}$ (B) $\frac{1}{2}$ (C) $\frac{5}{9}$ (D) $\frac{3}{5}$ (E) $\frac{2}{3}$

13. What is the minimum number of distinct colors needed to color each of the six circles below such that no two circles with the same color are touching?

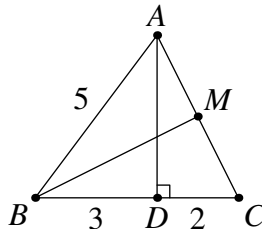


- (A) 2 (B) 3 (C) 4 (D) 5 (E) 6
14. Karate has some unread books in his room. Today, Karate plans to read 10 of his books. Tomorrow, Karate plans to read exactly half of his remaining books. The day after tomorrow, Karate plans to read 8 of his remaining books. After this, Karate will have read exactly three-quarters of his books. How many books does Karate have?
- (A) 28 (B) 36 (C) 45 (D) 48 (E) 52
15. Karate pushes n unit squares to a wall. Then, he puts three unit squares on top and pushes them to the wall. Finally, he puts two unit squares on top and pushes them to the wall. The figure below shows the resulting shape for $n = 3$. If points A and B represent the top-left and bottom-right vertices of the shape, respectively, what is the largest value of n such that segment AB does not go outside of the shape?



- (A) 3 (B) 4 (C) 5 (D) 6 (E) 7
16. Karate has 55 toys that he is packing into boxes. For every box, he wants the number of toys in that box to be equal to the number of boxes (including itself) that have the same number of toys as it does. How many boxes does Karate need?
- (A) 6 (B) 8 (C) 10 (D) 13 (E) 15

17. A karate outfit consists of either a beginner robe and a beginner belt or an advanced robe and an advanced belt. Karate has 5 robes and 13 belts in his collection, each of which are beginner or advanced. Karate can currently make 31 possible karate outfits. If he adds a beginner belt and an advanced belt, how many outfits can he then make?
- (A) 33 (B) 35 (C) 36 (D) 38 (E) 39
18. Each of the vertices of a 10-sided regular polygon is labeled with a positive digit from 1 to 9, inclusive. If the sum of the labels of any four consecutive vertices is constant, what is the greatest possible sum of all of the distinct digits used?
- (A) 9 (B) 17 (C) 24 (D) 30 (E) 45
19. A rectangle with a perimeter of 40 is split into four smaller rectangles by two lines that are parallel to the sides of the rectangle. If three of the rectangles have perimeters of 19, 21, and 25, what is the perimeter of the fourth rectangle?
- (A) 9 (B) 15 (C) 17 (D) 23 (E) 27
20. Starting from the same corner of a square city block, Karate and Judo both start walking around its 800-meter long perimeter in opposite directions. Karate walks at 1.4 meters per second, while Judo walks at 1.8 meters per second. What is the direct distance from their starting point to the point where they first meet again, in meters?
- (A) 200 (B) $175\sqrt{2}$ (C) 250 (D) $200\sqrt{2}$ (E) 300
21. In $\triangle ABC$, let D be the foot of the altitude from A to side \overline{BC} , and let M be the midpoint of side \overline{AC} . If $BD = 3$, $CD = 2$, and $AB = 5$, what is the length of \overline{BM} ?



- (A) 4 (B) $2\sqrt{5}$ (C) $2\sqrt{6}$ (D) $3\sqrt{3}$ (E) $4\sqrt{2}$

22. Naruto, Haruka, and Ayaka play a game, where each pair of players plays one match. In each match, there is a one-third chance of a tie, and each player has a one-third chance of winning. If players earn two points for winning and one point for a tie, what is the probability that each player has the same number of points after the game?

(A) $\frac{1}{27}$ (B) $\frac{2}{27}$ (C) $\frac{1}{9}$ (D) $\frac{7}{27}$ (E) $\frac{1}{3}$

23. Karate thinks of a two-digit number. Judo then asks the following questions in order:

- “Is the number a multiple of 2?”
- “Is the number a multiple of 3?”
- “Is the number a multiple of 4?”

Karate answers “yes,” “yes,” and “no” to each of the questions, but Judo forgot which order Karate said his responses in. How many possible values of the number are there?

(A) 21 (B) 24 (C) 29 (D) 33 (E) 37

24. Define the operation $a \ominus b = a + b - \sqrt{4ab}$. If N is a two-digit number such that

$$(4 \ominus N) \ominus (81 \ominus 196) = 4,$$

what is the sum of the possible values of N ?

(A) 73 (B) 106 (C) 113 (D) 130 (E) 145

25. Karate’s favorite positive integer A has B positive integer factors. If the product of A and B is equal to 13,500, what is the sum of the digits of the sum of A and B ?

(A) 9 (B) 10 (C) 11 (D) 12 (E) 13



KMMC
KARATE MASTERS MATHEMATICS
COMPETITIONS

KMMC 8 B

DO NOT OPEN UNTIL THURSDAY, December 30, 2021

****Administration on an earlier date will disqualify your results.****

- All the information needed to administer this exam is not contained in the non-existent KMMC 8 Teacher's Manual. PLEASE READ THE MANUAL BEFORE THURSDAY, DECEMBER 30, 2021.
- Send **DeToasty3**, **karate7800**, **pandabearcat**, and **pog** a private message submitting your answers to the KMMC 8. AoPS is the only way to submit your answers.
- The publication, reproduction or communication of the problems or solutions of this exam during the period when students are eligible to participate seriously jeopardizes the integrity of the results. Dissemination via copier, telephone, e-mail, World Wide Web or media of any type during this period is a violation of the competition rules.

For more information about the KMMC and our other competitions, please visit
Wait, we don't have a website!

Questions and comments about this competition should be sent to:

DeToasty3, karate7800, pandabearcat, and pog.

The problems and solutions for this KMMC 8 were prepared by the KMMC Editorial Board under the direction of:

bobthegod78, dc495, DeToasty3, HrishiP, karate7800, math31415926535, MathPirate101, pandabearcat, PhunsukhWangdu, pog, stayhomedomath, & treemath