



KMMC

KARATE MASTERS MATHEMATICS
COMPETITIONS

OFFICIAL SOLUTIONS

KARATE MASTERS MATHEMATICS COMPETITIONS

2ND ANNUAL

KMMC 8B

KARATE MASTERS MATHEMATICS COMPETITION 8B

THURSDAY, DECEMBER 30, 2021



This official solutions booklet gives at least one solution for each problem on this year's competition and shows that all problems can be solved without the use of a calculator. When more than one solution is provided, this is done to illustrate a significant contrast in methods. These solutions are by no means the only ones possible, nor are they necessarily superior to others the reader may devise.

People are encouraged to share copies of the problem booklet and official solutions with their friends and acquaintances to make the KMMC Committee feel happy. All problems should be credited to the KMMC (for example, "2021 Spring KMMC 10, Problem #21"). The publication, reproduction, or communication of the competition's problems or solutions for revenue-generating purposes is illegal.

Questions and complaints about this competition should be
sent by private message to

DeToasty3, karate7800, pandabearcat, and pog.

The problems and solutions for this KMMC 8 were prepared by the
KMMC 8 Editorial Board under the direction of

bobthegod78, dc495, DeToasty3, HrishiP, karate7800, math31415926535, MathPirate101,
pandabearcat, PhunsukhWangdu, pog, stayhomedomath, & treemath

Answer Key:

1. (E)	2. (A)	3. (E)	4. (E)	5. (A)
6. (B)	7. (C)	8. (C)	9. (D)	10. (B)
11. (A)	12. (D)	13. (B)	14. (E)	15. (B)
16. (E)	17. (C)	18. (B)	19. (B)	20. (C)
21. (B)	22. (C)	23. (A)	24. (B)	25. (D)

Problem 1:

(DeToasty3) Karate spent \$1.75 on candy, \$2.15 on soda, and \$4.25 on popcorn. If Karate pays with only 1-dollar bills, what is the least possible amount of change he could get back?

- (A) \$0.15 (B) \$0.40 (C) \$0.55 (D) \$0.60 (E) \$0.85

Answer (E):

Karate will get the least possible amount of change back if he pays as little as possible. Since he must pay at least

$$\$1.75 + \$2.15 + \$4.25 = \$8.15$$

in 1-dollar bills, the least he can pay is \$9.00. Consequently, the least possible amount of change he can get back is $\$9.00 - \$8.15 =$ **(E) \$0.85**. ■

Problem 2:

(pog) What is the value of the expression $\frac{4 \cdot 5 \cdot 6}{2(0 + 2 + 1)}$?

- (A) 20 (B) 28 (C) 30 (D) 36 (E) 40

Answer (A):

We have that the denominator of the given expression is $2(0 + 2 + 1) = 2(3) = 6$, so the requested answer is equal to

$$\frac{4 \cdot 5 \cdot 6}{2(0 + 2 + 1)} = \frac{4 \cdot 5 \cdot 6}{6} = 4 \cdot 5 = \text{(A) } 20. \quad \blacksquare$$

Problem 3:

(pog) Naruto is running forwards. At some point, he turns around and runs backwards. If Naruto ran a total of 60 equal steps and ended up 24 steps behind where he started running, for how many steps was Naruto running backwards?

- (A) 18 (B) 36 (C) 38 (D) 40 (E) 42

Answer (E):

For every step Naruto runs backwards, he will end up 2 steps behind if he had ran forwards. Let b be how many steps Naruto was running backwards. Then $60 - 2b = -24$, so $-2b = -84$ and solving gives $b = \boxed{\text{(E) } 42}$. ■

Problem 4:

(pandabearcat & DeToasty3) Aki and Ayaka take a total of eight pictures in which at least one of them appears. If Aki appears in five of the pictures, and Ayaka appears in seven of the pictures, in how many of the pictures do they both appear?

- (A) 0 (B) 1 (C) 2 (D) 3 (E) 4

Answer (E):

First, fix Aki in five of the pictures. Then, the other three pictures must have only Ayaka. This leaves $7 - 3 = 4$ other pictures which Ayaka must be in, so she must be in $\boxed{\text{(E) } 4}$ of Aki's pictures. ■

Problem 5:

(pog) Karate and Judo are playing a game with 100 rounds. Each round, either Karate wins, Judo wins, or they tie. If Karate wins 3 rounds, and the number of rounds Judo wins is a perfect square, what is the least possible number of rounds where they tie?

- (A) 16 (B) 19 (C) 22 (D) 25 (E) 28

Answer (A):

Since Karate won 3 rounds, Judo can win at most 97 rounds. To minimize the number of rounds where nobody wins, we want Judo to win as many rounds as possible. The largest perfect square that is less than 97 is 81, so Judo won 81 rounds and there are

$97 - 81 = \boxed{\text{(A) } 16}$ rounds where they tie. ■

Problem 6:

(treemath) Haruka's Ice Cream Shop sells ice cream cones where each wafer cone and each scoop of ice cream costs the same amount for all of the orders. If an ice cream cone with four scoops costs the same as three ice cream cones with one scoop each, what is the ratio between the cost of a wafer cone and the cost of a scoop of ice cream?

- (A) 1 : 3 (B) 1 : 2 (C) 2 : 3 (D) 1 : 1 (E) 2 : 1

Answer (B):

Let the price of an ice cream cone be c , and let the price of a scoop of ice cream be s . We get that $c + 4s = 3c + 3s$, so $2c = s$. Thus, the requested ratio is

$$\frac{c}{s} = \frac{c}{2c} = \boxed{\text{(B) } 1 : 2}. \quad \blacksquare$$

Problem 7:

(HrishiP) Which of the following numbers cannot be expressed as the sum of two prime numbers?

- (A) 15 (B) 16 (C) 17 (D) 18 (E) 19

Answer (C):

We will use process of elimination. We see that $15 = 2 + 13$, $16 = 3 + 13$, $18 = 5 + 13$, and $19 = 2 + 17$. We also see that the only way to achieve a sum of 17 with two prime numbers is if we have an even prime number and an odd prime number. The only even prime number is 2, but $17 - 2 = 15$, which is not prime. Thus, the requested answer is

$\boxed{\text{(C) } 17}$. ■

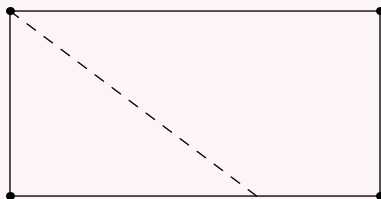
Problem 8:

(treemath) A line intersects a rectangle and divides it into two shapes. If one of the shapes has 4 sides, what are all of the numbers of sides the other shape could possibly have?

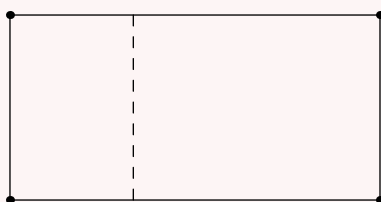
- (A) 3 (B) 4 (C) 3 and 4 (D) 4 and 5 (E) 3, 4, and 5

Answer (C):

Note that the other shape must have at least three sides or else it would not be a shape. We see that the other shape can have three sides if the line intersects the rectangle at a vertex and another side (not at another vertex).



The other shape can also have four sides if the line intersects the rectangle at two opposite sides (not at any vertices).



Finally, the other shape cannot have more than four sides because the line can intersect the rectangle at most twice, creating at most two new sides, as well as the segment of the line inside the rectangle, which creates two new sides, one for each shape. This creates at most $4 + 2 + 2 = 8$ total sides between the two shapes, so hence the other shape has at most $8 - 4 = 4$ sides.

Thus, our answer is **(C) 3 and 4**. ■

Problem 9:

(treemath) How many 5-digit numbers evenly divide 100,000?

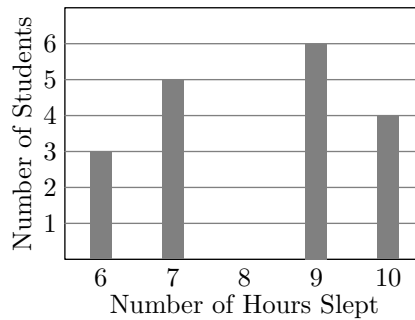
- (A) 2 (B) 3 (C) 4 (D) 5 (E) 6

Answer (D):

Note that all factors of 100,000 are in the form $\frac{100,000}{\gamma}$, where γ is the corresponding factor in the factor pair $\left(\frac{100,000}{\gamma}, \gamma\right)$. Note that $\frac{100,000}{\gamma}$ is only a 5-digit number when $2 \leq \gamma \leq 10$. Checking values of γ , we get that $\gamma \in \{2, 4, 5, 8, 10\}$. Each value of γ corresponds with a 5-digit number that evenly divides 100,000, for an answer of **(D) 5**.

Problem 10:

(DeToasty3 & pandabearcat) In a survey, Karate asked the students of his third grade class how many hours of sleep each student got last night. The bar graph below shows the results of Karate's survey. However, the bar representing 8 hours has been mysteriously erased. If the median number of hours slept is 8.5, how many students slept for 8 hours?



- (A) 1 (B) 2 (C) 3 (D) 4 (E) 5

Answer (B):

Since the median number of hours slept is 8.5 and some number of students slept for 9 hours, the two middle numbers of the survey are 8 and 9. Consequently, there must be the same number of students who slept for 9 or 10 hours as the number of students who slept for 6, 7, or 8 hours.

Let x be the number of students who slept for 8 hours. Then $3 + 5 + x = 6 + 4$. Solving gives $x =$ **(B) 2**.

Problem 11:

(treemath) Judo has 100 bronze coins. As many times as he wants, he can exchange 4 bronze coins for a silver coin or 6 silver coins for a gold coin. What is the smallest number of coins that Judo can have after making some number of exchanges?

- (A) 5 (B) 7 (C) 8 (D) 10 (E) 12

Answer (A):

If we don't exchange for as many gold coins as possible, we will be left with at least 6 other coins that we could've exchanged for a gold coin, so it is ideal to exchange for as many gold coins as possible.

Since a gold coin is worth $4 \cdot 6 = 24$ bronze coins and we have 100 bronze coins, we want to exchange for 4 gold coins, so thus we now have $100 - 24 \cdot 4 = 4$ bronze coins left. Now it is clearly optimal to exchange for a silver coin, so thus we have 4 gold coins and 1 silver coin for an answer of **(A) 5** coins.

Remark: This method is called the greedy algorithm, and it worked here because of the specific denominations of the coins—in some cases, the greedy algorithm does not produce an optimal solution. For example, if we had 30 pennies and we could exchange for a dime or a quarter, the greedy algorithm would exchange for 1 quarter and 5 pennies, while the optimal strategy is to exchange for 3 dimes. ■

Problem 12:

(treemath & pog) What is the probability that a randomly chosen arrangement of the letters of the word *KARATE* will have an *A* as the first letter or the last letter (or both)?

- (A) $\frac{7}{15}$ (B) $\frac{1}{2}$ (C) $\frac{5}{9}$ (D) $\frac{3}{5}$ (E) $\frac{2}{3}$

Answer (D):

Note that

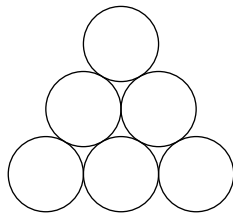
$$P(A \text{ is first letter or last letter}) + P(A \text{ is neither first letter nor last letter}) = 1,$$

so the desired probability is equal to $1 - P(A \text{ is neither first letter nor last letter})$. Hence, we can start by finding the probability that *A* is neither the first nor the last letter of a randomly chosen arrangement of the letters of the word *KARATE* and subtract it from 1.

There is a $\frac{4}{6}$ probability that the first *A* is neither first nor last. Then, after this *A* is placed, there is a $\frac{3}{5}$ probability that the second *A* is neither first nor last. Thus, the complementary probability is $\frac{4}{6} \cdot \frac{3}{5} = \frac{2}{5}$. Hence, the requested probability is $1 - \frac{2}{5} = \mathbf{(D) \frac{3}{5}}$. ■

Problem 13:

(HrishiP) What is the minimum number of distinct colors needed to color each of the six circles below such that no two circles with the same color are touching?



- (A) 2 (B) 3 (C) 4 (D) 5 (E) 6

Answer (B):

First, color the top circle red. Next, we need the two circles below the red circle to be different colors, say, blue and green, from left to right. Finally, if we color the bottom three circles green, red, and blue, from left to right, then this coloring works. We have used three colors and we must use at least three colors in order to color the top three circles that are all touching, so the answer is **(B) 3**. ■

Problem 14:

(DeToasty3) Karate has some unread books in his room. Today, Karate plans to read 10 of his books. Tomorrow, Karate plans to read exactly half of his remaining books. The day after tomorrow, Karate plans to read 8 of his remaining books. After this, Karate will have read exactly three-quarters of his books. How many books does Karate have?

- (A) 28 (B) 36 (C) 45 (D) 48 (E) 52

Answer (E):

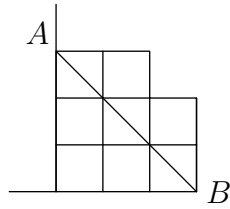
Let n be the number of books Karate has. We have the equation

$$10 + \frac{1}{2} \cdot (n - 10) + 8 = \frac{3n}{4} \implies 13 = \frac{n}{4}.$$

Solving for n gives us **(E) 52**. ■

Problem 15:

(DeToasty3) Karate pushes n unit squares to a wall. Then, he puts three unit squares on top and pushes them to the wall. Finally, he puts two unit squares on top and pushes them to the wall. The figure below shows the resulting shape for $n = 3$. If points A and B represent the top-left and bottom-right vertices of the shape, respectively, what is the largest value of n such that segment \overline{AB} does not go outside of the shape?



- (A) 3 (B) 4 (C) 5 (D) 6 (E) 7

Answer (B):

Since $A = (0, 3)$ and $B = (n, 0)$, segment \overline{AB} has slope $-\frac{3}{n}$. Hence, the farthest out segment \overline{AB} will extend in the top row is $\frac{n}{3}$ and the farthest out segment \overline{AB} will extend in the middle row is $\frac{2n}{3}$.

Consequently, segment \overline{AB} will stay inside of the shape if $\frac{n}{3} \leq 2$ and $\frac{2n}{3} \leq 3$. Solving each inequality, we get that $n \leq 6$ and $n \leq 4.5$, so thus the largest possible value of n is

(B) 4. ■

Problem 16:

(treemath) Karate has 55 toys that he is packing into boxes. For every box, he wants the number of toys in that box to be equal to the number of boxes (including itself) that have the same number of toys as it does. How many boxes does Karate need?

- (A) 6 (B) 8 (C) 10 (D) 13 (E) 15

Answer (E):

We can consider every box with n toys as part of a collection of n boxes. For convenience, denote a set of boxes as (a_1, a_2, \dots) , where each positive integer term of the set corresponds with a collection of n boxes (each with n toys), and $a_1 > a_2 > \dots$.

Note that you need $(a_1)^2 + (a_2)^2 + \dots$ toys to pack a set of boxes (a_1, a_2, \dots) . Hence we want to express 55 as a sum of distinct perfect squares. Evidently $a_1 \leq 7$, since $7^2 < 55 < 8^2$.

Case 1: $a_1 = 7$

Then we want a sum of distinct perfect squares to be equal to $55 - 49 = 6$. However, this cannot happen, so $a_1 \leq 6$.

Case 2: $a_1 = 6$

Then we want a sum of distinct perfect squares to be equal to $55 - 36 = 19$. However, this also cannot happen, so $a_1 \leq 5$.

Case 3: $a_1 = 5$

Then we want a sum of distinct perfect squares to be equal to $55 - 25 = 30$. Since $4^2 + 3^2 + 2^2 + 1^2 = 30$, this works—and is the only possible solution, as we already proved that $a_1 \leq 5$, but if we hadn't used any of 5, 4, 3, 2, or 1, we would have less than 55 boxes.

Hence, $(a_1, a_2, a_3, a_4, a_5) = (5, 4, 3, 2, 1)$ and Karate must use $5 + 4 + 3 + 2 + 1 =$ (E) 15 boxes. ■

Problem 17:

(treemath) A karate outfit consists of either a beginner robe and a beginner belt or an advanced robe and an advanced belt. Karate has 5 robes and 13 belts in his collection, each of which are beginner or advanced. Karate can currently make 31 possible karate outfits. If he adds a beginner belt and an advanced belt, how many outfits can he then make?

- (A) 33 (B) 35 (C) 36 (D) 38 (E) 39

Answer (C):

If Karate has r_b beginner robes, r_a advanced robes, b_b beginner belts, and b_a advanced robes, then by the Fundamental Counting Principle, he can make $r_b b_b + r_a b_a$ outfits. Hence

$$r_b b_b + r_a b_a = 31.$$

If we add a beginner belt and an advanced belt, we can then make

$$r_b(b_b + 1) + r_a(b_a + 1) = (r_b b_b + r_a b_a) + (r_b + r_a)$$

outfits. We are given that $r_b b_b + r_a b_a = 31$. Since Karate has 5 robes, $r_b + r_a = 5$, so hence Karate can then make $31 + 5 =$ (C) 36 outfits. ■

Problem 18:

(treemath) Each of the vertices of a 10-sided regular polygon is labeled with a positive digit from 1 to 9, inclusive. If the sum of the labels of any four consecutive vertices is constant, what is the greatest possible sum of all of the distinct digits used?

- (A) 9 (B) 17 (C) 24 (D) 30 (E) 45

Answer (B):

Suppose that the labels are a_1, a_2, \dots, a_{10} in that order. For five consecutive labels a_1, a_2, a_3, a_4, a_5 , we have that

$$a_1 + a_2 + a_3 + a_4 = a_2 + a_3 + a_4 + a_5,$$

so $a_1 = a_5$.

Hence, for any five consecutive vertices, the first label is equal to the last label. Continuing this pattern, $a_1 = a_5 = a_9 = a_3 = a_7 = a_1 = \dots$ (note that vertices $a_9, a_{10}, a_1, a_2, a_3$ are consecutive).

As well, $a_2 = a_6 = a_{10} = a_4 = a_8 = a_2 = \dots$, so

$$a_1 = a_3 = a_5 = a_7 = a_9$$

$$a_2 = a_4 = a_6 = a_8 = a_{10}.$$

Therefore, there are at most two distinct digits used. The greatest possible sum occurs when the digits are as large as possible, so they are equal to 8 and 9 (in some order).

Hence, our answer is $8 + 9 = \boxed{\text{(B) } 17}$. ■

Problem 19:

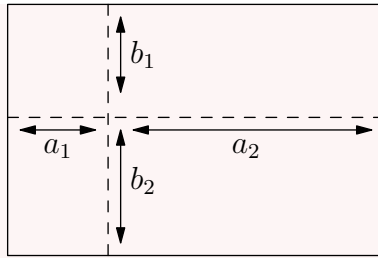
(treemath) A rectangle with a perimeter of 40 is split into four smaller rectangles by two lines that are parallel to the sides of the rectangle. If three of the rectangles have perimeters of 19, 21, and 25, what is the perimeter of the fourth rectangle?

- (A) 9 (B) 15 (C) 17 (D) 23 (E) 27

Answer (B):

If the two lines are parallel to the same side of the rectangle, the rectangle will only be split into 3 smaller rectangles. Hence the two lines are parallel to different sides of the rectangle.

Let the sides of the smaller rectangles be a_1, a_2, b_1 , and b_2 , where a_1 and a_2 are their horizontal lengths and b_1 and b_2 are their vertical lengths.



Hence, the perimeters of the four smaller rectangles are then $2(a_1 + b_1)$, $2(b_1 + a_2)$, $2(a_1 + b_2)$, and $2(b_2 + a_2)$ in some order.

Note that the sum of the perimeters of the four smaller rectangles is equal to

$$2(a_1 + b_1 + b_1 + a_2 + a_1 + b_2 + b_2 + a_2) = 2(2a_1 + 2a_2 + 2b_1 + 2b_2).$$

Since $a_1 + a_2$ is equal to the base of the rectangle and $b_1 + b_2$ is equal to the height of the rectangle, the perimeter of the rectangle is equal to $2a_1 + 2a_2 + 2b_1 + 2b_2$.

Consequently, $2a_1 + 2a_2 + 2b_1 + 2b_2 = 40$ and thus the sum of the perimeters of the four smaller rectangles is equal to $2 \cdot 40 = 80$. Let the perimeter of the fourth rectangle be x . Then $19 + 21 + 25 + x = 80$, so $x = \boxed{\text{(B) } 15}$. ■

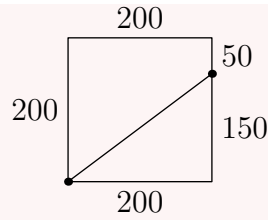
Problem 20:

(treemath) Starting from the same corner of a square city block, Karate and Judo both start walking around its 800-meter long perimeter in opposite directions. Karate walks at 1.4 meters per second, while Judo walks at 1.8 meters per second. What is the direct distance from their starting point to the point where they first meet again, in meters?

- (A) 200 (B) $175\sqrt{2}$ (C) 250 (D) $200\sqrt{2}$ (E) 300

Answer (C):

Note that Karate and Judo will get $1.4 + 1.8 = 3.2$ meters closer every second. Thus $800 \div 3.2 = 250$ seconds will pass before they meet again. At that point, Karate will have walked $250 \cdot 1.4 = 350$ meters and Judo will have walked $250 \cdot 1.8 = 450$ meters. Each side of the rectangle is 200 meters long, so Karate will have walked one side and 150 meters of his second side, while Judo will have walked two sides and 50 meters of his third side.

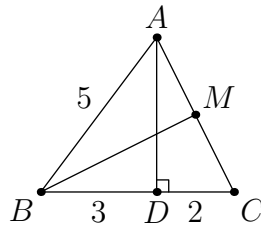


Consequently, by the Pythagorean theorem, the direct distance from their starting point to the point where they first meet again is

$$\sqrt{200^2 + 150^2} = 50\sqrt{3^2 + 4^2} = 50 \cdot 5 = \boxed{\text{(C) } 250}.$$

Problem 21:

(PhunsukhWangdu & DeToasty3) In $\triangle ABC$, let D be the foot of the altitude from A to side \overline{BC} , and let M be the midpoint of side \overline{AC} . If $BD = 3$, $CD = 2$, and $AB = 5$, what is the length of \overline{BM} ?



- (A) 4 (B) $2\sqrt{5}$ (C) $2\sqrt{6}$ (D) $3\sqrt{3}$ (E) $4\sqrt{2}$

Answer (B):

By the Pythagorean Theorem, we have that $AD = \sqrt{AB^2 - BD^2} = \sqrt{25 - 9} = 4$. Next, drop a perpendicular from M to side \overline{BC} and call its foot point P . By similarity, we have that $MP = \frac{AD}{2} = 2$, and $BP = BD + DP = 3 + \frac{CD}{2} = 4$. Finally, by the Pythagorean Theorem on $\triangle BPM$, we have that

$$BM = \sqrt{MP^2 + BP^2} = \sqrt{4 + 16} = \boxed{\text{(B) } 2\sqrt{5}},$$

as desired.

OR

Note that because M is the midpoint of \overline{AC} and $AB = BC$, we have that $\triangle AMB \cong$

$\triangle CMB$ by *SSS* congruence. Hence, $\angle AMB = \angle CMB$. Since \overline{AC} is a line, $\angle AMB + \angle CMB = 180^\circ$. Thus, $\angle AMB = \angle CMB = 90^\circ$ and $\overline{BM} \perp \overline{AC}$.

Hence, \overline{BM} is the altitude from B of $\triangle ABC$. Next, by the Pythagorean Theorem, we have that $AD = \sqrt{AB^2 - BD^2} = \sqrt{25 - 9} = 4$. By the Pythagorean Theorem again, we have that $AC = \sqrt{AD^2 + CD^2} = \sqrt{16 + 4} = 2\sqrt{5}$. By the base-area formula, we have that

$$\frac{AD \cdot BC}{2} = \frac{AC \cdot BM}{2}.$$

This equation becomes $4 \cdot 5 = 2\sqrt{5} \cdot BM$, giving $BM = \boxed{\text{(B)} 2\sqrt{5}}$. ■

Problem 22:

(treemath) Naruto, Haruka, and Ayaka play a game, where each pair of players plays one match. In each match, there is a one-third chance of a tie, and each player has a one-third chance of winning. If players earn two points for winning and one point for a tie, what is the probability that each player has the same number of points after the game?

- (A) $\frac{1}{27}$ (B) $\frac{2}{27}$ (C) $\frac{1}{9}$ (D) $\frac{7}{27}$ (E) $\frac{1}{3}$

Answer (C):

Regardless of if the games are tied or won, each game will give out 2 points. Hence, players get a total of $2 \cdot 3 = 6$ points across the three games, and thus each player must have $\frac{6}{3} = 2$ points.

Each player plays 2 games. There are 2 ways to get 2 points across 2 games: either both games are tied, or one game is won and the other game is lost. Note that this implies all players must tie both of their games or all players must win exactly one game.

Case 1: All games are tied.

The probability that a given game is tied is $\frac{1}{3}$, so the probability that all three games are tied is $\frac{1}{3} \cdot \frac{1}{3} \cdot \frac{1}{3} = \frac{1}{27}$ probability.

Case 2: All players win exactly one game.

If all three games result in someone winning and someone losing, and all three winners are different, then each player will have the same number of points after the game. Suppose that Naruto beat Haruka. Then, Haruka must have beat Ayaka, and Ayaka must have beat Naruto. Otherwise, if Haruka beat Naruto, then Naruto must have beat Ayaka, and Ayaka must have beat Haruka. This gives us 2 ways, for a probability of $\frac{2}{27}$.

Thus, the total probability is $\frac{1}{27} + \frac{2}{27} = \boxed{\text{(C)} \frac{1}{9}}$. ■

Problem 23:

(pog) Karate thinks of a two-digit number. Judo then asks the following questions in order:

- “Is the number a multiple of 2?”
- “Is the number a multiple of 3?”
- “Is the number a multiple of 4?”

Karate answers “yes,” “yes,” and “no” to each of the questions, but Judo forgot which order Karate said his responses in. How many possible values of the number are there?

- (A) 21 (B) 24 (C) 29 (D) 33 (E) 37

Answer (A):

Let Karate’s number be n . We can split the possible values of n into cases, as follows.

Case 1: n is a multiple of 4

If n is a multiple of 4, then it is also a multiple of 2. Seeing as Karate said no to one of the questions, it cannot also be a multiple of 3. Thus, n can be any two-digit multiple of 4 that is not also a multiple of 3. The smallest two-digit multiple of 4 is $3 \cdot 4$ and the largest two-digit multiple of 4 is $24 \cdot 4$, so there are $24 - 3 + 1 = 22$ two-digit multiples of 4. Of these, $\{12, 24, 36, 48, 60, 72, 84, 96\}$ are also multiples of 3, which don’t work, so there are $22 - 8 = 14$ possibilities for this case.

Case 2: n is not a multiple of 4

Seeing as Karate said yes to two of the questions, n must be a multiple of both 2 and 3, so n can be any two-digit multiple of 6 that is not also a multiple of 4. The smallest two-digit multiple of 6 is $2 \cdot 6$ and the largest two-digit multiple of 6 is $16 \cdot 6$, so there are $16 - 2 + 1 = 15$ two-digit multiples of 6. Of these, $\{12, 24, 36, 48, 60, 72, 84, 96\}$ are also multiples of 4, which don’t work, so there are $15 - 8 = 7$ possibilities for this case.

There are no overlaps between the two groups as the first group cannot contain multiples of 3 and the second group can only contain multiples of 3, so our answer is $14 + 7 =$

$\boxed{\text{(A)} 21}$. ■

Problem 24:

(treemath & pog) Define the operation $a \ominus b = a + b - \sqrt{4ab}$. If N is a two-digit number such that

$$(4 \ominus N) \ominus (81 \ominus 196) = 4,$$

what is the sum of the possible values of N ?

- (A) 73 (B) 106 (C) 113 (D) 130 (E) 145

Answer (B):

Note that $a + b - \sqrt{4ab} = a + b - 2\sqrt{ab}$, which we notice is equal to $(\sqrt{a} - \sqrt{b})^2$.

By the given equation, we have that

$$\begin{aligned} (4 \ominus N) \ominus (81 \ominus 196) &= 4 \\ (2 - \sqrt{N})^2 \ominus (\sqrt{81} - \sqrt{196})^2 &= 4 \\ (2 - \sqrt{N})^2 \ominus 25 &= 4 \\ \left(\sqrt{(2 - \sqrt{N})^2} - \sqrt{25}\right)^2 &= 4 \\ \sqrt{(2 - \sqrt{N})^2} - 5 &= \pm 2. \end{aligned}$$

Note that $\sqrt{(2 - \sqrt{N})^2} = |2 - \sqrt{N}|$. Since N is a two-digit number, $\sqrt{N} > 2$, so thus $2 - \sqrt{N}$ is negative.

Hence, $|2 - \sqrt{N}| = -(2 - \sqrt{N}) = \sqrt{N} - 2$. Thus, $\sqrt{N} - 2 - 5 = \pm 2$, so either $\sqrt{N} = 9$ or $\sqrt{N} = 5$. Consequently, the possible values of N are 81 and 25, for an answer of $25 + 81 = \boxed{\text{(B) } 106}$.

OR

Let $4 \ominus N = \gamma$. Then $\gamma \ominus (81 \ominus 196) = 4$. By computation, we get $81 \ominus 196 = 81 + 196 - \sqrt{4 \cdot 81 \cdot 196} = 277 - 2 \cdot 9 \cdot 14 = 25$, so $\gamma \ominus 25 = 4$.

Thus, $\gamma + 25 - \sqrt{4 \cdot 25 \cdot \gamma} = 4$. Rearranging, we get $\gamma - 10\sqrt{\gamma} + 21 = 0$, which factors as $(\sqrt{\gamma} - 3)(\sqrt{\gamma} - 7) = 0$.

Hence, $\sqrt{\gamma} = 3$ or $\sqrt{\gamma} = 7$, so either $\gamma = 9$ or $\gamma = 49$.

Case 1: $\gamma = 9$

We get that $4 + N - \sqrt{4 \cdot 4 \cdot N} = 9$. Rearranging, we get $N - 4\sqrt{N} - 5 = 0$, which factors as $(\sqrt{N} + 1)(\sqrt{N} - 5) = 0$. Since \sqrt{N} must be positive, we get that $\sqrt{N} = 5$, so if $\gamma = 9$, then $N = 25$.

Case 2: $\gamma = 49$

We get that $4 + N - \sqrt{4 \cdot 4 \cdot N} = 49$. Rearranging, we get $N - 4\sqrt{N} - 45 = 0$, which factors as $(\sqrt{N} + 5)(\sqrt{N} - 9) = 0$. Since \sqrt{N} must be positive, we get that $\sqrt{N} = 9$, so if $\gamma = 49$, then $N = 81$.

Consequently, the possible values of N are 25 and 81, for an answer of $81 + 25 =$
(B) 106. ■

Problem 25:

(pog) Karate's favorite positive integer A has B positive integer factors. If the product of A and B is equal to 13,500, what is the sum of the digits of the sum of A and B ?

- (A) 9 (B) 10 (C) 11 (D) 12 (E) 13

Answer (D):

Note that $13500 = 2^2 \cdot 3^3 \cdot 5^3$, and thus $A \cdot B$ contains 2 powers of 2, 3 powers of 3, and 3 powers of 5.

Let $A = 2^x \cdot 3^y \cdot 5^z$, where $x \in \{0, 1, 2\}$, $y \in \{0, 1, 2, 3\}$, and $z \in \{0, 1, 2, 3\}$. Then $B = (x + 1)(y + 1)(z + 1)$.

If A is a multiple of 5, then since 5 is prime, $x + 1$, $y + 1$, or $z + 1$ would have to contain a multiple of 5, which is impossible as x , y , and z cannot be greater than 3, so B cannot be a multiple of 5.

However, $A \cdot B$ has exactly three powers of 5, so A must contain all three powers of 5, and thus $z = 3$.

Consequently, $B = (x + 1)(y + 1)(3 + 1)$, so B must contain two powers of 2. Since $A \cdot B$ has exactly two powers of 2, we get that A contains no powers of 2, so $x = 0$.

Hence, $A = 2^0 \cdot 3^y \cdot 5^3$, where $y \in \{0, 1, 2, 3\}$.

If y is odd, then $B = (0 + 1)(\text{odd} + 1)(3 + 1)$. However, then B would contain at least three powers of 2, and since $A \cdot B$ has exactly two powers of 2, we get that y cannot be odd.

If $y = 0$, then A has no powers of 3 and $B = (0 + 1)(0 + 1)(3 + 1) = 4$ has no powers of 3 either. However, $A \cdot B$ must have exactly three powers of 3, so y cannot be 0.

If $y = 2$, then A has two powers of 3 and $B = (0 + 1)(2 + 1)(3 + 1) = 12$ has one power of 3, which works.

Therefore, $(A, B) = (1125, 12)$ and $A + B = 1125 + 12 = 1137$. Hence, our answer is $1 + 1 + 3 + 7 = \boxed{\text{(D) } 12}$. ■